



**Sindhi High School K.K Road Bangalore**  
**Half yearly Examination (2024-25)**  
**Subject : English**

Name: \_\_\_\_\_  
Class: 3 A / B / C  
Roll No. : \_\_\_\_\_  
No. of printed sides: 6

Date: 3/10/24  
Marks: 40  
Reading Time: 8.00 am - 8.15 am  
Writing Time: 8.15 am - 10.15 am

**General Instructions:**

1. This paper contains three sections.
2. Section A – Reading – 10 marks
3. Section B – Writing and Grammar – 16 marks
4. Section C – Literature – 14 marks
5. Answer ALL questions

**Section A- Reading**

**I-Read the following passage and answer the given questions :** (5 marks)

APJ Abdul Kalam , 'The Missile Man' of India was born in a middle class Tamil family in the island town of Rameswaram in the former Madras state on 15th October 1931. His father Jainulabdeen had not much formal education but he possessed great wisdom. His mother Ashiamma was a caring and loving mother and housewife. He was one of the many children who lived in an ancestral house. During the Second World War, Kalam was around eight years old. His life was clearly full of struggle. However he still faced all odds and became an inspiration to the new generation of India. He has been a luminous star in Indian history and has proved to be a true People's president.

1. Kalam has been a luminous star in Indian history and has proved to be a true \_\_\_\_\_.
  - a) Peoples President.
  - b) hero of the people.
  - c) caring and loving mother.
  - d) life was clearly full of struggle.
2. Kalam's father Jainulabdeen had not much formal education but possessed \_\_\_\_\_. ( great wisdom, education)
3. 'The Missile Man' of India is \_\_\_\_\_.  
(APJ Abdul kalam/ Jainulabeen)

4. APJ Abdul Kalam was born in \_\_\_\_\_. (Rameswaram/ Lucknow)

5. Who were Kalam's parents?

A. \_\_\_\_\_

**II Read the following passage and answer the given questions :**

**(5 marks)**

A feast was held at the palace of the Khalifa of Bagdad to celebrate the birth of his son. Kings and queens from across the world were invited. Each one of them came dressed in silk and gold jewels. Expensive gifts were given to the child.

In the midst of such a crowd, was a sage. He had come empty handed. He looked at the child and said, "The prince has received gold and jewels. But I brought the most precious of all the gifts. I brought the gift of 'stories' to him."

The sage came every day and told stories to the child. He told him stories from around the world. His stories also had good values. The child listened to the stories and grew truthful and kind. When he became the king, he was liked by all for his wisdom and loyalty.

**Answer the following questions.**

**1. Choose the correct answer:**

1) When the child became a king, he was known for his \_\_\_\_\_.  
( wisdom, betrayal)

2) The feast was held at the \_\_\_\_\_. (town, palace)

3) Who were the invitees for the feast?

- a) Kings from across the world.
- b) queens from across the world.
- c) poor people.
- d) Kings and queens from across the world.

4) The Sage brought \_\_\_\_\_.


- a) the gift of stories
- b) silk and cotton
- c) swords and shields
- d) gold and jewels

5) The stories of the sage helped the child to be \_\_\_\_\_.

- a) truthful and kind
- b) untruthful and dishonest

Section B- Writing and Grammar

III. Look at the picture below and write a paragraph describing it using adjectives given in the clue box. Give a suitable title to your paragraph. (5 marks)



( huge, busy, crowded, noisy, dirty, clean, rush, big clock, heavy luggage)

---

---

---

---

---

---

---

---

---

---



### Grammar

**A) Fill in the blanks using the correct form of pronouns given in the brackets.** (1 x 3 = 3 marks)

1. Why are you shouting at \_\_\_\_\_ (I).
2. We didn't expect this from \_\_\_\_\_ (he).
3. These are my books. Priya are they \_\_\_\_\_ (her/yours).

**B) Circle the adjectives (describing words) in the following paragraph** (1/2 x 8 = 4 marks)

For dinner my mom is cooking pizza! I am watching her while she makes it: her small hands pick up the big bag of flour, she mixes it in a bowl with warm water and salt and yeast. She kneads it on a clean tabletop and shapes it into a big circle and spreads the sauce with the tasty toppings and loads of cheese and bakes it into the hot oven. I can't wait to eat the yummy pizza.

**C) Identify the Subject and Write in the space provided:** (1/2 x 4 = 2 marks)

1. Ram was punished.

A. \_\_\_\_\_

2. Taj Mahal is located in Agra.

A. \_\_\_\_\_

3. My elder sister is a great dancer.

A. \_\_\_\_\_

4. New Delhi is the capital city of India.

A. \_\_\_\_\_

**D) Fill in the blanks with the articles a, an, or the** (1/2 x 4 = 2 marks)

One afternoon \_\_\_\_\_ fox was walking through a forest. He spotted \_\_\_\_\_ bunch of grapes hanging from \_\_\_\_\_ branch. \_\_\_\_\_ fox jumped high and ate the grapes.

### SECTION C – LITERATURE

E) Read the following extract and answer the following questions: (1 x 2 =2 marks)

“It looks like her, doesn’t it?” she asked. “But I don’t know what to think .it is very wrong for Benjamin to do such a thing?” she added.

1. Name the lesson from which the above extract has been taken from.

- a) A wonderful gift
- b) Padmini the princess
- c) Noi saves the whale
- d) The brook

2. Who is the speaker of the above words and to whom is she talking to?

A) \_\_\_\_\_  
\_\_\_\_\_  
\_\_\_\_\_

F) Answer the Following questions:

(2x4=8 marks)

1. Does the speaker enjoy watching the Brook? What makes you think so?

A) \_\_\_\_\_  
\_\_\_\_\_  
\_\_\_\_\_

2. Why did Amma start to cry when she saw the gun?

A) \_\_\_\_\_  
\_\_\_\_\_  
\_\_\_\_\_

B) What efforts did Noi put to make the whale comfortable?

A) \_\_\_\_\_  
\_\_\_\_\_  
\_\_\_\_\_

3. Why does the baby windhover become so weak?

A) \_\_\_\_\_  
\_\_\_\_\_  
\_\_\_\_\_

G) Answer the following:

(2x2=4 marks)

1. Describe Benjamin in 4 lines.

A. \_\_\_\_\_  
\_\_\_\_\_  
\_\_\_\_\_  
\_\_\_\_\_

2. How does the frog describe the sky?

A. \_\_\_\_\_  
\_\_\_\_\_  
\_\_\_\_\_  
\_\_\_\_\_



**SINDH HIGH SCHOOL, K.K.ROAD BENGALURU**

**HALF YEARLY EXAM, 2024-2025**

**SUBJECT: HINDI(Additional Lang)**



**Class: III A / B / C**

**Name: \_\_\_\_\_**

**Roll No : \_\_\_\_\_**

**No. of printed sides: 5**

**Date: 24/9/2024**

**Max. Marks: 40**

**Reading Time: 8:00 to 8:15am**

**Writing Time: 8:15 to 10:15am**

**खंड : क**

**[I] निम्न लिखित गद्यांश को पढ़कर दिए गए प्रश्नों के सही उत्तर चुनिए :**

**1x5=5**

जंगल में एक खरगोश रहता था। उसके चार मित्र थे - गाय, हिरन, घोड़ा और बकरी। पाँच दोस्त मिल-जुलकर हँसी-खुशी से समय बिता रहे थे। एक दिन कुछ कुत्ते खरगोश के पीछे पड़ गए। खरगोश बहुत डराया। वह अपने मित्रों में से सबसे पहले घोड़े के पास सहायता माँगने गया। वह घबराकर घोड़े से बोला मित्र मुझे किसी तरह इस कुत्ते से बचाओ। ये तो मुझे मार डालेंगे।

1. जंगल में एक कौन रहता था?

(i) खरगोश (ii) हाथी (iii) शेर (iv) मोर

2. खरगोश के पीछे कौन पड़ गया था ?

(i) बिल्ली (ii) बच्चे (iii) कुत्ते (iv) औरत

3. खरगोश के कितने मित्र थे?

(i) एक (ii) दो (iii) तीन (iv) चार

4. सबसे पहले खरगोश किस के पास सहायता माँगने गया?

(i) गाय (ii) हिरन (iii) घोड़ा (iv) बकरी

5. नीचे दिए गए शब्द का विलोम गद्यांश में से ढूँढ़कर लिखिए -

आगे X \_\_\_\_\_

**खंड : ख**

**[II] पर्याय वाची शब्द लिखिए :**

**½ x4 =2**



1. प्रसन्नता : \_\_\_\_\_

2. धन : \_\_\_\_\_

[III] विलोम शब्द लिखिए :

$\frac{1}{2} \times 4 = 2$

1. रुचि x \_\_\_\_\_ 2. चालाकी x \_\_\_\_\_

3. प्रकाश x \_\_\_\_\_ 4. कुशल x \_\_\_\_\_

[IV] वचन बदलकर लिखिए :

$\frac{1}{2} \times 4 = 2$

1. बकरी - \_\_\_\_\_ 2. खुशी - \_\_\_\_\_

3. बच्चा - \_\_\_\_\_ 4. घंटा - \_\_\_\_\_

[V] अनेक शब्दों के लिए एक शब्द लिखिए:

$1 \times 2 = 2$

1. जिसके आने की कोई तिथि न हो - \_\_\_\_\_

2. धर्म को मानने वाला - \_\_\_\_\_

[VI] नीचे लिखे वाक्यों में उपयुक्त विराम-चिह्न लगाइए।

$\frac{1}{2} \times 2 = 1$

1. तुम कहाँ जा रहे हो

2. बनिए ने यह कुआँ ब्राह्मण को बेच दिया

[VII] नीचे लिखे अशुद्ध शब्दों को शुद्ध करके लिखिए -

$\frac{1}{2} \times 2 = 1$

1. महाराज - \_\_\_\_\_ 2. काराग्रह - \_\_\_\_\_

[VIII] समान तुकवाले एक-एक शब्द लिखिए।

$\frac{1}{2} \times 2 = 1$

1. मरता - \_\_\_\_\_

2. छोटा - \_\_\_\_\_



[IX] सही विशेषण का प्रयोग करके वाक्य पूरे कीजिए।

$\frac{1}{2} \times 2 = 1$

1. चाँद ने \_\_\_\_\_ शिंगोला सिलवाने के लिए कहा। ( मोटा / पतला )
2. चाँद कभी - कभी \_\_\_\_\_ हो जाता है। (छोटा / छोटी )

[X] सही क्रिया शब्द भरकर वाक्य पूरे कीजिए।

$\frac{1}{2} \times 4 = 2$

1. चाँद ठिठुर \_\_\_\_\_ । (रहा था / रही थी )
2. बच्चे खेल \_\_\_\_\_ । (रहे थे / रही थी )
3. चलो, आज कहीं घूमने \_\_\_\_\_ । (चलें / आँ )
4. जो खेल पसंद हो, वही \_\_\_\_\_ । (खेलो / चलो )

[XI] वाक्य बनाओ।

$1 \times 2 = 2$

1. जन्मदिन -

\_\_\_\_\_

2. कुरता -

\_\_\_\_\_

खंड : ग

[II] निम्न लिखित गद्यांश को पढ़कर दिए गए प्रश्नों के सही उत्तर चुनिए :

$1 \times 5 = 5$

हिमालय की गोद में नदी का घर था। उसके जल में अधिकतर बूँदें बहुत नटखट थीं। उन्हें एक जगह से दूसरी जगह घूमना अच्छा लगता था। घर में मन नहीं लगने पर ये बूँदें नदी की तेज़ धारा में तैरने चली जाती थीं। पर एक बूँद पानी की तलहटी में डरी - सहमी बैठी रहती थी। सभी बूँदें उसे शर्मीली नाम से बुलाया करती थीं।

1. नदी का घर कहाँ था ?

(i) हिमालय की गोद में

(ii) पहाड़ की गोद में

(iii) शहर में

(iv) गाँव में

2. जल की अधिकतर बूँदें कैसी थी ?

(i) प्यारी - प्यारी

(ii) नटखट

(iii) शर्मीली

(iv) आलसी

3. बूँदों को क्या अच्छा लगता था ?

- (i) एक जगह से दूसरी जगह घूमना (ii) शरारतें करना  
(iii) पढ़ाई करना (iv) पूरा दिन काम करना

4. घर में मन नहीं लगने पर बूँदे क्या करती थीं ?

- (i) तेज़ धारा में तैरने चली जाती (ii) घर में रोने लगती थीं  
(iii) हिमालय के पास जाती थीं (iv) कुछ नहीं करती थीं

5. डरी-सहमी बूँद कहाँ बैठी रहती थी?

- (i) कुएँ में (ii) तालाब में  
(iii) तलहटी में (iv) माँ की गोद में

[II] नीचे दिए गए प्रश्नों के उत्तर लिखिए :

1x10=10

1. बीज बोने पर क्या बन जाता है ?

---

2. चीची ने पनीर का टुकड़ा किसे दे दिया ?

---

3. बनिये की चालाकी कौन समझ गया ?

---

4. एक दिन माता से किसने हठ की ?

---

5. होली पर सब एक-दूसरे पर क्या डालते हैं ?

---

6. ओलंपिक के लिए क्वालीफाई करने वाली भारत की पहली महिला जिम्नास्ट कौन थी ?

7. तमिलनाडु में फ़सल पर आधारित कौन -सा पर्व मनाया जाता है ?

8. चाँद क्या सिलवाना चाहता था ?

9. दीपा करमाकर किस राज्य की निवासी हैं ?

10. क्या करने से देश बड़ा होगा ?

खंड : घ

दिए गए चित्रों के आधार पर त्योहार का नाम बताइए और त्योहार के बारे में पाँच वाक्य लिखिए।<sup>4</sup>







SINDHI HIGH SCHOOL, K K ROAD, BENGALURU.

Half Yearly Exam-2024-25

Subject: II Language Kannada



Name: \_\_\_\_\_

Date: 1/10/24

Class: III

Marks: 40

Roll No: \_\_\_\_\_ Sec: A/B/C

Reading Time: 8:00 to 8:15 am

No of sides: 5

Writing Time: 8:15 to 10:15 am

1. ಈ ಕಥೆಯನ್ನು ಓದಿ, ಕೆಳಗೆ ಕೊಟ್ಟಿರುವ ಬಹು ಆಯ್ಕೆ ಪ್ರಶ್ನೆಗಳಿಗೆ ಸರಿಯಾದುದನ್ನು ಆರಿಸಿ ಬರೆಯಿರಿ. 1x5=5

ಬೀರೂರಿನಲ್ಲಿ ರಾಮಣ್ಣ ಎಂಬ ಕಟ್ಟಿಗೆ ವ್ಯಾಪಾರಿಯು ವಾಸಿಸುತ್ತಿದ್ದನು. ಅವನು ತುಂಬಾ ಬಡವನಾಗಿದ್ದನು. ಅವನು ಪ್ರತಿದಿನ ಬೆಳಗ್ಗೆ ಕಾಡಿಗೆ ಹೋಗಿ ಒಣಮರವನ್ನು ಕಡಿದು ತರುತ್ತಿದ್ದನು. ಅದನ್ನು ಪೇಟೆಯಲ್ಲಿ ಮಾರಿ ಜೀವನ ನಡೆಸುತ್ತಿದ್ದನು. ಅವನು ಎಂದೂ ಹಸಿಮರವನ್ನು ಕಡಿದವನಲ್ಲ, ಇದಕ್ಕಾಗಿ ಇವನಿಗೆ ವನದೇವತೆಯು ಅಕ್ಷಯಪಾತ್ರೆಯನ್ನು ನೀಡಿದಳು. ಇದರಿಂದ ರಾಮಣ್ಣ ಶ್ರೀಮಂತನಾದನು. ಆದರೆ ಎಂದಿಗೂ ಅಕ್ಷಯಪಾತ್ರೆಯನ್ನು ದುರುಪಯೋಗ ಮಾಡಿಕೊಳ್ಳಲಿಲ್ಲ. ಮುಂದೆ ಸುಖಜೀವನವನ್ನು ಕಳೆದನು.

**ಪ್ರಶ್ನೆಗಳು:-**

೧. ರಾಮಣ್ಣನು ಒಬ್ಬ \_\_\_\_\_ ವ್ಯಾಪಾರಿಯಾಗಿದ್ದನು.

ಅ) ಚಿನ್ನ    ಆ) ಬೆಳ್ಳಿ    ಇ) ತಾಮ್ರ    ಈ) ಕಟ್ಟಿಗೆ

೨. ರಾಮಣ್ಣನು \_\_\_\_\_ ನಲ್ಲಿ ವಾಸಿಸುತ್ತಿದ್ದನು.

ಅ) ಬೀರೂರು    ಆ) ಮದ್ದೂರು    ಇ) ಮಳೂರು    ಈ) ಮೈಸೂರು

೩. ರಾಮಣ್ಣನು ಪ್ರತಿದಿನ \_\_\_\_\_ ಕಾಡಿಗೆ ಹೋಗುತ್ತಿದ್ದನು.

ಅ) ಸಂಜೆ    ಆ) ಬೆಳಗ್ಗೆ    ಇ) ಮಧ್ಯಾಹ್ನ    ಈ) ರಾತ್ರಿ



೪.ರಾಮಣ್ಣನಿಗೆ ಅಕ್ಷಯಪಾತ್ರೆಯನ್ನು ನೀಡಿದ್ದು \_\_\_\_\_.

ಅ) ಕುಲದೇವತೆ ಆ) ನಗರದೇವತೆ ಇ)ವನದೇವತೆ ಈ)ಇಷ್ಟದೇವತೆ

೫. ರಾಮಣ್ಣನು ಎಂದು \_\_\_\_\_ವನ್ನು ಕಡಿದಿರಲಿಲ್ಲ.

ಅ)ಒಣಮರ ಆ) ಅರ್ಧಮರ ಇ) ಚಿಕ್ಕಮರ ಈ) ಹಸಿಮರ

II. ಸೂಚನೆಯಂತೆ ಬರೆಯಿರಿ.

(ಅ) ವಿರುದ್ಧ ಪದಗಳನ್ನು ಬರೆಯಿರಿ.

1 x 2 = 2

೧) ಸತ್ಯ \* \_\_\_\_\_ ೨) ಕೆಳಗೆ \* \_\_\_\_\_

(ಆ)ವಚನ ಬದಲಿಸಿ ಬರೆಯಿರಿ

1 x 2 = 2

೧) ಮಗು = \_\_\_\_\_ ೨) ಬಟ್ಟೆ = \_\_\_\_\_

(ಇ) ಸಮಾನಾರ್ಥ ಪದ ಬರೆಯಿರಿ.

1 x 2 = 2

೧)ಚಕ್ರ = \_\_\_\_\_ ೨) ಸಮೂಹ = \_\_\_\_\_

(ಈ) ಲಿಂಗ ಬದಲಿಸಿ ಬರೆಯಿರಿ.

1 x 2 = 2

೧) ಯುವಕ = \_\_\_\_\_ ೨) ಹುಡುಗಿ = \_\_\_\_\_

(ಉ) ಕೂಡಿಸಿ ಬರೆಯಿರಿ.

1

೧) ದೇವ + ಆಲಯ = \_\_\_\_\_

(ಊ) ಕೆಳಗಿನ ಪದಗಳಿಗೆ ಪ್ರಾಸಪದಗಳನ್ನು ಬರೆಯಿರಿ.

1 x 2 = 2

೧) ತೋರಿದರು = \_\_\_\_\_

೨) ನಾಯಿ = \_\_\_\_\_

(ಋ)ಹೋಲಿಕೆ ಗಮನಿಸಿ ಬರೆಯಿರಿ.

1 x 2 = 2

೧.ಹಗ್ಗ : ಸಜಾತೀಯ ಸಂಯುಕ್ತಾಕ್ಷರ :: ರಕ್ತ : \_\_\_\_\_

೨.ಗಿಡಮರಗಳನ್ನು ಕತ್ತರಿಸಬಾರದು: ಸರಿ : ಮಹಿಳಾ ಗಾಬರಿಯಿಂದ ಬಿದ್ದಳು: \_\_\_\_\_

( ಎ ) ಸ್ವಂತ ವಾಕ್ಯ ಮಾಡಿ.

1

೧.ನೆನಪು

( ಏ ) ಅರ್ಥಕೊಡುವಂತೆ ಅಕ್ಷರ ಸೇರಿಸಿ ಪದಬಂಧ ಪೂರ್ಣಗೊಳಿಸಿ.

$\frac{1}{2} \times 2 = 1$

೧)

	ಮ	
ಗೌ		ವ
	ಣ	

೨)

	ಗು	
ಹು		ಗ
	ಗು	

III. ಬಿಟ್ಟ ಸ್ಥಳ ತುಂಬಿ.

$1 \times 5 = 5$

೧. ಮಳೆ ಬಂದು \_\_\_\_\_ ಬಲು ಕೆಟ್ಟು ಹೋಗಿತ್ತು.

೨. ಶ್ರಮದ \_\_\_\_\_ ದೇಶಕ್ಕೆ ಕಲಿಸಿ ಒಳ್ಳೆಯ ದಾರಿ ತೋರಿದರು.

೩. ಕಲ್ಲೊಂದು \_\_\_\_\_ ಒಗೆದಿದ್ದೆ ಅದರ ಎಡೆಗೆ.

೪. ಮಹಿಳಾಗುವ ಉತ್ತರಾಖಂಡದ \_\_\_\_\_ ದೇವಾಲಯಕ್ಕೆ ಬಂದಿದ್ದಳು.

೫. 'ಚಿಟ್ಟೆ' ಪದ್ಯವನ್ನು ರಚಿಸಿದ ಕವಿಯ ಹೆಸರು \_\_\_\_\_

IV. ಕೆಳಗಿನ ಪ್ರಶ್ನೆಗಳಿಗೆ ಒಂದು ವಾಕ್ಯದಲ್ಲಿ ಉತ್ತರಿಸಿ.

$1 \times 5 = 5$

೧. ವ್ಯಾಪಾರಿಯು ಯುವಕನನ್ನು ಏನೆಂದು ಕೂಗಿದನು?

ಉತ್ತರ

---



---



---

೨. ಗಾಂಧೀಜಿಯವರಿಗೆ ಯಾವುದು ಆಧಾರವಾಗಿತ್ತು?

ಉತ್ತರ

---



---



---

೩.ನಾಯಿ ಎಲ್ಲಿ ಮಲಗಿತ್ತು?

ಉತ್ತರ: \_\_\_\_\_

೪.ಮಹಿಳಾಗುಪ್ತಳಿಗೆ ಯಾವ ಪುಸ್ತಕ ನೀಡಲಾಯಿತು?

ಉತ್ತರ: \_\_\_\_\_

೫.ಮಗು ಶಾಲೆಗೆ ಹೇಗೆ ಹೊರಟಿತ್ತು?

ಉತ್ತರ: \_\_\_\_\_

V. ಎರಡು -ಮೂರು ವಾಕ್ಯಗಳಲ್ಲಿ ಉತ್ತರಿಸಿ.

2x3=6

೧.ಗಾಂಧೀಜಿಯವರು ಯಾವ ದಾರಿಯನ್ನು ತುಳಿಯಲಿಲ್ಲ?ಅವರು ಮಧುರ ಪ್ರೀತಿಯನ್ನು ಹೇಗೆ ಬೀರಿದರು?

ಉತ್ತರ: \_\_\_\_\_

೨.ನಾಯಿ ಆವೇಶದಿಂದ ಏನು ಮಾಡಿತು? ಯಾವ ತಪ್ಪು ಹುಡುಗನಿಗೆ ಪಾಠ ಕಲಿಸಿತು?

ಉತ್ತರ

೩.ಮಹಿಳಾ ಏಕೆ ಬೊಬ್ಬಿರಿದಳು?

ಉತ್ತರ

VI. ಈ ಮಾತನ್ನು ಯಾರು ಯಾರಿಗೆ ಹೇಳಿದರು?

2x2=4

೧." ನೀನೇ ಎತ್ತಿಕೋ ನಾನೇಕೆ ಎತ್ತಲಿ?"

ಉತ್ತರ

೨." ಅವನನ್ನು ಪ್ರೀತಿಯಿಂದ ಮಾತನಾಡಿಸಿರಿ".

ಉತ್ತರ





SINDHI HIGH SCHOOL K K ROAD, BENGALURU-01

HALF YEARLY EXAM (2024-25)

SUBJECT: E V S



Name: \_\_\_\_\_

Date: 26 / 9 / 2024

Class: 3 A / B / C

Marks: 40

Roll No: \_\_\_\_\_

Reading Time: 8.00 am - 8.15 am

No of Printed Sides: 5

Writing Time: 8.15 am – 10.15 am

**General Instructions:**

Answer **ALL** questions

**I. Multiple choice questions**

1x4 =4 marks

1. Which of the following means of transport moves on land only?

- a. Boat      b. Rocket      c. Bus      d. Aeroplane

2. Which of the following is the mass communication?

- a. Post      b. Telephone      c. Bank      d. Radio

3. Which of the following cannot be used by people to travel from one place to another ?

- a. Train      b. Autorikshaw      c. Scooter      d. Police Van

4. Which of the following is used to carry sick people to hospital ?

- a. Police Van      b. Bullock cart      c. Ambulance      d. Cycle

**II. Fill in the blanks**

1x4=4 marks

1. \_\_\_\_\_ feathers help birds to fly. They are found on the wings and the tail.

2. Parrots have a sharp and \_\_\_\_\_ beak which help to crack nuts and seeds and also to tear fruits.

3. Animals like fish, octopus and whale live under water they are called \_\_\_\_\_ animals.

4. A \_\_\_\_\_ is used to send an email.

III. Label the parts of the bird

$\frac{1}{2} \times 4 = 2$  marks



IV. Who am I?

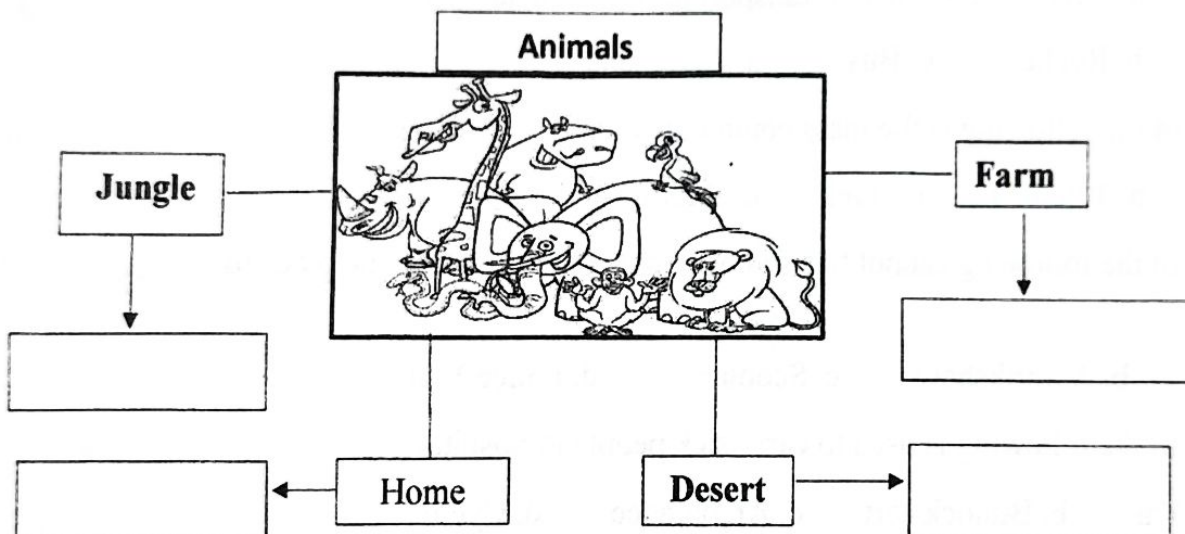
$1 \times 2 = 2$  marks

1. Animals that live on land \_\_\_\_\_
2. Animals that live on both land and in water \_\_\_\_\_

V. Mind Map

$1 \times 4 = 4$  marks

Name the animals according to their habitats



V. Write True or False





$1 \times 4 = 4$  marks

1. Sparrow have a small pointed beak which helps to pick small grains \_\_\_\_\_
2. Animals which feed on the flesh of other animals are called Herbivorous \_\_\_\_\_
3. Dancers use various hand gestures, body movements and postures called mudras \_\_\_\_\_
4. It is not compulsory to wear the seat belt in a car \_\_\_\_\_

VI. Who lives on a farm

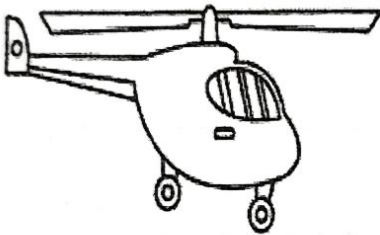
$\frac{1}{2} \times 4 = 2$  marks

Colour the animals that live on a farm



VII. Identify the picture and write two sentences about it.

2 marks



---

---

---

---


---

VIII. Categories these animals as per their eating habits


$1 \times 2 = 2$  marks

1. This animals eat plants

2. This animal eat other animal



---



---

**IX. Circle the words in the puzzle given below**

1x4=4 marks

Find the name of the means of transport which move on land, air, water.

A	S	F	W	P	L	A	N	E	M
G	O	B	P	A	S	D	C	V	O
B	O	A	T	F	D	N	M	B	T
A	R	L	B	E	U	I	O	K	O
H	E	L	I	C	O	P	T	E	R
E	D	O	C	M	O	T	R	L	C
R	C	O	Y	V	L	B	U	S	Y
Y	A	N	C	A	R	K	C	J	C
H	D	G	L	N	H	J	K	R	L
B	M	Y	E	W	Q	D	H	E	E

**X. Find the odd once**

½ x4=2 marks

1. Eagle      Parrot      Dog      Sparrows
2. Cow      Goat      Pot      Cat
3. Bus      School      Scooter      Car
4. Man      Plane      Van      Bus

**XI. Answer the following questions**

3x2=6 marks

1. Nests act as shelters for birds. Explain.

Ans. \_\_\_\_\_  
\_\_\_\_\_  
\_\_\_\_\_  
\_\_\_\_\_

2. Animals move from one place to another. Give reason.

Ans. \_\_\_\_\_  
\_\_\_\_\_  
\_\_\_\_\_



3. List any 2 safety measures while walking on Road.

Ans. \_\_\_\_\_


\_\_\_\_\_

\_\_\_\_\_

\_\_\_\_\_

XII. Draw any one special vehicle and colour it.

2 marks





Sindhi High School, KK Road, Bengaluru-01.

Half Yearly Examination - 2024-25

Subject: Mathematics



Name: \_\_\_\_\_

Date: 30 /09/2024

Class: 3A /B /C

Marks: 40

Roll No: \_\_\_\_\_

Reading Time: 8:00 – 8:15 am

No of Printed Sides: 5

Writing Time: 8:15 – 10:15 am

Section – A

I. Choose the correct answer: -

(1 X 5 = 5)

1)  $0 + 540 =$  \_\_\_\_\_

- (a) 0      (b) 54      (c) 540      (d) 480

2)  $6312 + 3126 = 3126 +$  \_\_\_\_\_

- (a) 6312      (b) 3126      (c) 0      (d) 6000

3) \_\_\_\_\_ - 5126 = 0

- (a) 6000      (b) 9000      (c) 5126      (d) 8000

4)  $1000 \times 8 =$  \_\_\_\_\_

- (a) 6000      (b) 9000      (c) 5000      (d) 8000

5) The odd number just after 87 is \_\_\_\_\_

- (a) 85      (b) 89      (c) 88      (d) 90

II. Fill in the blanks: -

(1 X 5 = 5)

- 1) The letter '10' is written as \_\_\_\_\_ in Roman numeral.
- 2) The result of subtraction is called the \_\_\_\_\_.
- 3) When you subtract '1' from 500 you get \_\_\_\_\_.
- 4) \_\_\_\_\_ is the largest 4 – digit number.
- 5) If one chocolate costs ₹ 6, the cost of 6 chocolates is \_\_\_\_\_.

Section – B

III. Complete the table: -

(1 X 2 = 2)

X	100	1000
343		
787		

IV. Do as directed :-

(1 X 2 = 2)

1) Add :

	H	T	O
	2	6	9
+	4	2	5

2) Subtract :

	H	T	O
	4	5	1
-	3	8	6

V. Write the place value and face value of the underlined digits :- (1X2= 2)

	Number	Face Value	Place Value
1)	<u>5</u> 9 0 6		
2)	3 <u>4</u> 7 5		

VI. Do as following :-

(1 X 2 = 2)

a) Add the following :

$$4263 + 1535$$

Th	H	T	O

b) Subtract the following :

$$7346 - 4752$$

Th	H	T	O



### Section - C

**VII. Multiply :-**

**(2 X 2 = 4)**

1) 342 X 21

	H	T	O
	3	4	2
X		2	1

2) 102 X 33

	H	T	O
	1	0	2
X		3	3

**VIII. Write the answer using the Roman numerals :-**

**(1 X 3 = 3)**

a) VI - IV = \_\_\_\_\_

b) XX - V = \_\_\_\_\_

c) L + XIX = \_\_\_\_\_

**IX. Do as directed :-**

**(1 X 3 = 3)**

**Represent this numeral on the abacus and write the number name:**

a) 7,728

TL	H	T	O

---



---

b) Write the number 7728 in the expanded form :

\_\_\_\_\_

**Section - D**

**X. Solve the word problems : -**

**(3 X 4 = 12)**

1. In a farm there are 375 apple trees and 216 mango trees, find the total number of trees in the farm.

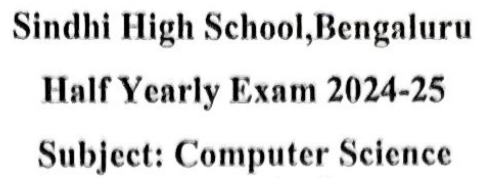
\_\_\_\_\_ =  
\_\_\_\_\_  
\_\_\_\_\_  
\_\_\_\_\_

2. Suma had 430 marbles. If she lost 121 marbles, how many marbles are left with her?

\_\_\_\_\_ =  
\_\_\_\_\_  
\_\_\_\_\_  
\_\_\_\_\_

3. There are 8 pieces in each dairy milk chocolate. How many pieces will be there in 125 such dairy milk chocolates?

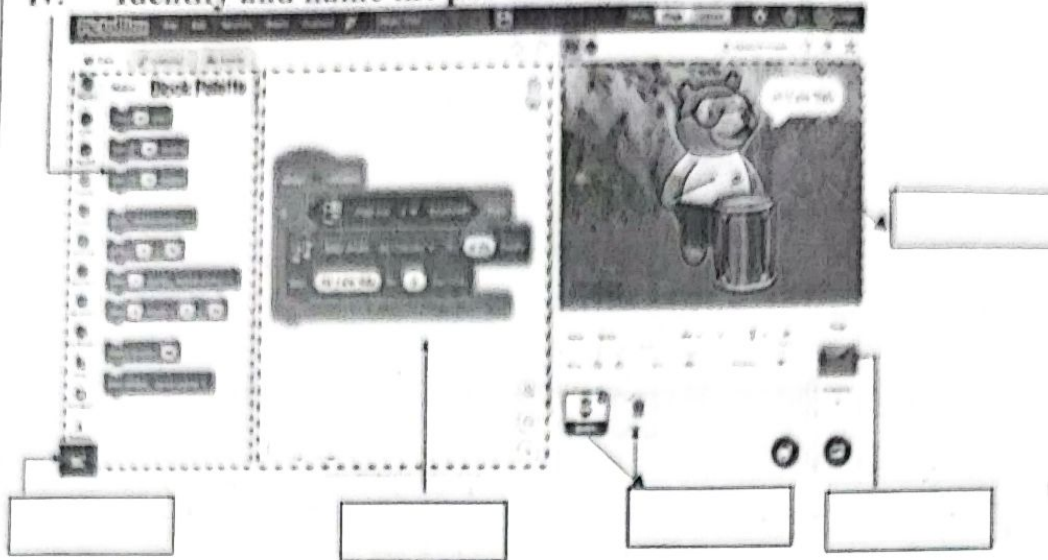
\_\_\_\_\_ =  
\_\_\_\_\_  
\_\_\_\_\_  
\_\_\_\_\_



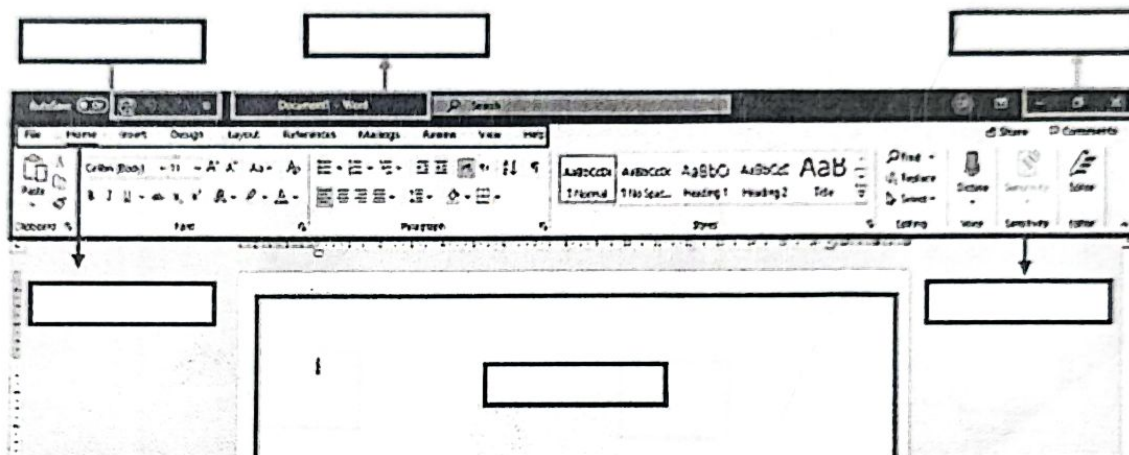
Name: \_\_\_\_\_

iv. Identify and name the parts of PictoBlox interface.

(3)



v. Identify and name the parts of MS word interface. (3)



\*\*\*\*\*